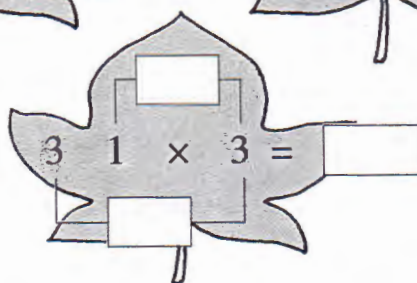
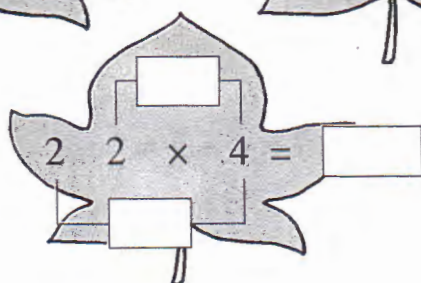
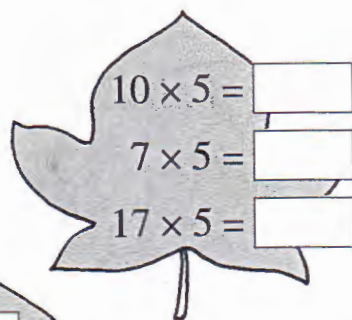
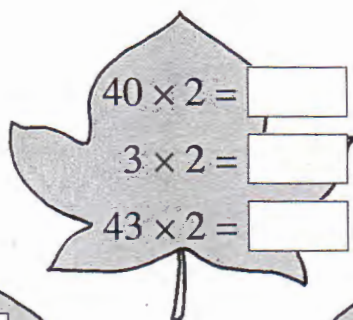
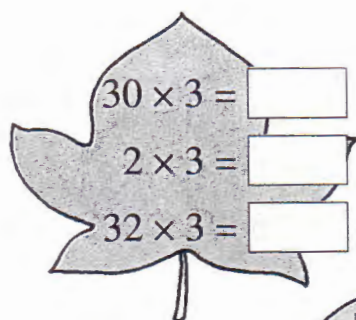




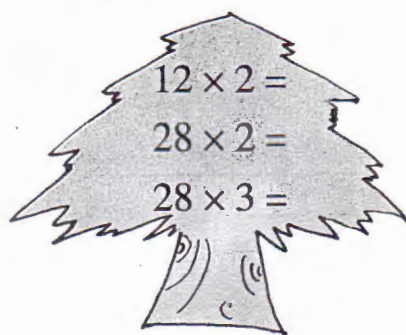


## 【2】两位数乘一位数(一)

1. 算一算,填一填。



2. 口算。



3. 解决问题。

(1)

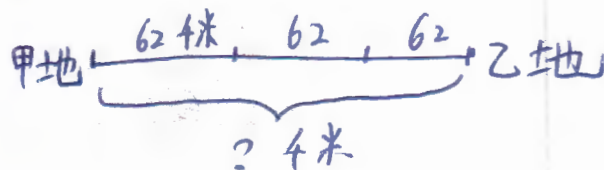


每箱 46 元

① 3 箱可乐共有多少瓶?

② 买 2 箱可乐要多少元?

(2) 张叔叔开车从甲地赶往乙地,平均每小时行驶 62 千米,3 小时到达。甲、乙两地相距多少千米?





# 【4】两位数乘一位数(二)

1.

$$27 \times 4 = 80 + \boxed{\phantom{00}}$$

$$= \boxed{\phantom{00}}$$

$$76 \times 5 = \boxed{\phantom{00}} + 30$$

$$= \boxed{\phantom{00}}$$

$$68 \times 3 = 180 + \boxed{\phantom{00}}$$

$$= \boxed{\phantom{00}}$$

$$34 \times 3 = \boxed{\phantom{00}} + 12$$

$$= \boxed{\phantom{00}}$$

2. 比一比,算一算。

$$23 \times 4 =$$

$$23 \times 9 =$$

$$36 \times 8 =$$

$$63 \times 8 =$$

$$26 \times 9 =$$


$$62 \times 9 =$$


$$57 \times 7 =$$

$$75 \times 7 =$$


3. 看图填空。


(1)  = 27

 = ( )

 = ( )

(2)  = 46

 = ( )

 = ( )

4. 解决问题。

(1) 买4本《学数学,长智慧》一共要多少元?

(2) 购买7套这样的书,500元够吗?

新书	《学数学,长志气》26元
推荐	《学数学,长见识》26元
	《学数学,长智慧》28元
购买全套	
优惠价 75元	

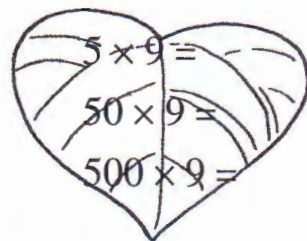
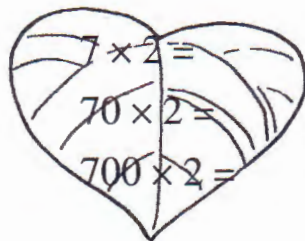
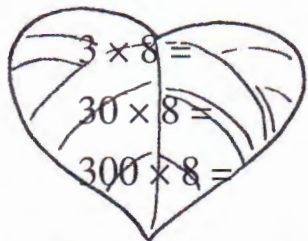




## 一 花果山上学数学

## 【1】主题图


1. 比一比,算一算。






2. 口算。

$6 \times 3 + 1 =$	$5 \times 9 + 6 =$	$7 \times 4 + 3 =$	$9 \times 6 + 3 =$
$3 \times 9 + 5 =$	$8 \times 6 + 3 =$	$7 \times 7 + 5 =$	$7 \times 8 + 6 =$
$8 \times 4 + 3 =$	$7 \times 9 + 7 =$	$6 \times 6 + 4 =$	$3 \times 8 + 7 =$
$180 + 42 =$	$640 + 24 =$	$160 + 28 =$	$450 + 63 =$
$360 + 63 =$	$350 + 49 =$	$270 + 45 =$	$280 + 56 =$

3. 列式计算。

(1) 买两件  要多少元? \_\_\_\_\_买两条  要多少元? \_\_\_\_\_

一共要多少元? \_\_\_\_\_

(2) 一套  的价格是一条  的4倍。一套  要多少元? \_\_\_\_\_一套  和一条  一共要多少元? \_\_\_\_\_

This page is optional for 2nd graders.

## — 绿化家园

## 【1】主题图

1. 在□里填数。

$34 = 6 \times 5 + \square$

$50 = 6 \times 9 - \square$

$29 = \square \times 6 - 1$

$75 = 8 \times 9 + \square$

$64 = 7 \times 9 + \square$

$83 = 9 \times \square + 2$

2. 下面的钟面分别是什么时间?



( )



( )



( )



( )

3. 饲养场里有白兔 25 只,黑兔 30 只,灰兔比黑兔多 16 只。灰兔有多少只? 白兔与灰兔相差多少只?

4. 体育室里有 50 个皮球,平均每班领走 6 个。5 个班共领走了多少个皮球? 还剩多少个皮球?





This page is optional for 2nd graders.

【6】乘除与加减混合

1. 用“      ”标出先算的部分,再计算。(先算 $\times$ 或 $\div$ ,再算 $+$ 或 $-$ )

$$\begin{array}{l} \overset{48}{8 \times 6} + 13 = 61 \\ 36 \div 9 + 9 = \end{array}$$

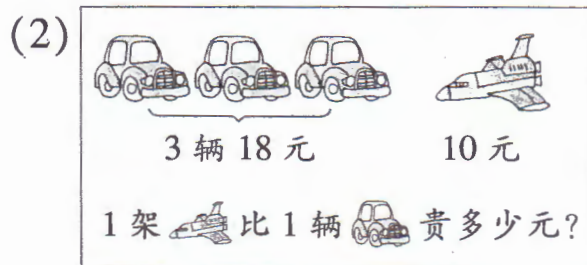
$$\begin{array}{l} 72 - 9 \times 6 = \\ 24 + 24 \div 8 = \end{array}$$

$$\begin{array}{l} 18 \div 3 \times 6 = \\ 30 - 30 \div 5 = \end{array}$$

2. 看图列式计算。



算式:



算式:

3. 兰兰每分打字 20 个。一篇文章她打了 6 分后还剩 14 个字没打。这篇文章有几个字?



妈妈买了 8 枝百合花,付出 100 元,应找回多少元?

5. 看图列式计算。(Optional)

$$\begin{array}{l} 3 \times \star - 9 = 18 \\ \star = ? \end{array}$$

$$\begin{array}{l} 45 - \star \times 3 = 18 \\ \star = ? \end{array}$$

$$\begin{array}{l} \star \times 3 + 9 = 18 \\ \star = ? \end{array}$$

